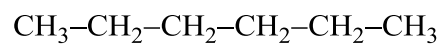
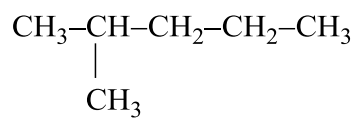


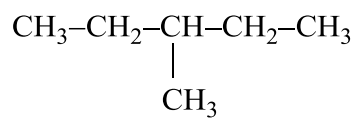
Vytvoř řetězové izomery hexanu a pojmenuj.



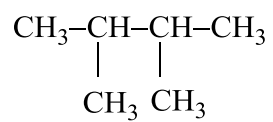
hexan



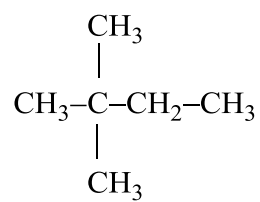
2-methylpentan



3-methylpentan



2,3-dimethylbutan



2,2-dimethylbutan