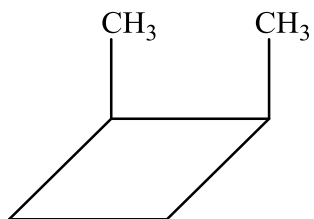
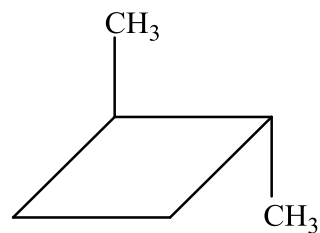


Vytvořte geometrické izomery:

a) 1,2-dimethylcyklobutan

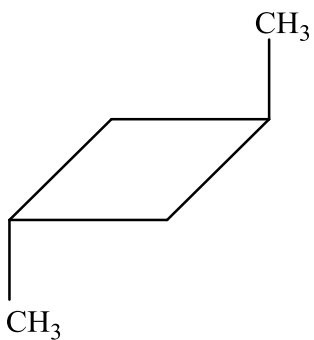


(Z)-1,2-dimethylcyklobutan

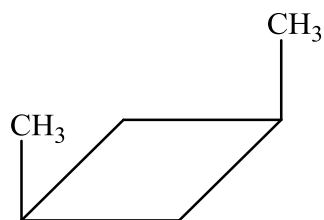


(E)-1,2-dimethylcyklobutan

b) 1,3-dimethylcyklobutan



(E)-1,3-dimethylcyklobutan



(Z)-1,3-dimethylcyklobutan